

# Name the Landform

## Possible Landforms

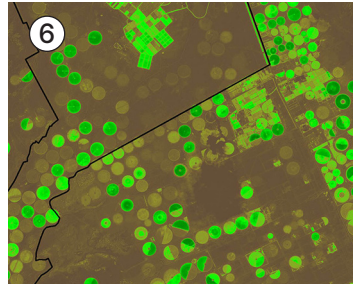
glacier	islands
irrigated fields	canyon
urban area (city)	volcano
river delta	dunes

These Earth images were taken by NASA and USGS's Landsat 8 spacecraft. Landsat 8 carries two instruments, OLI (Operational Land Imager) and TIRS (Thermal Infrared Sensor). Ball Aerospace built OLI and the TIRS cryocooler. Ball built the same two things for Landsat 9, which will launch in 2021.

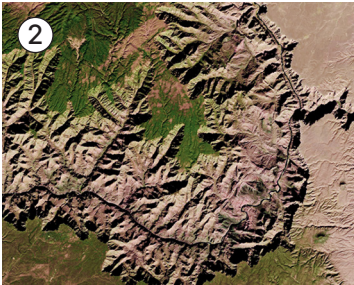
Beside each picture, write the name of the landform you believe is shown. When you're finished, check your answers against those on the back of this page.




---




---





---




---



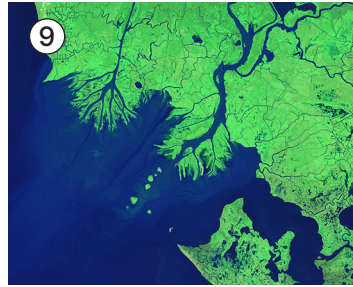

---




---




---




---




---




---

### **Answers**

1. dunes
2. canyon
3. river delta
4. glacier
5. volcano
6. irrigated fields
7. islands
8. dunes
9. river delta
10. urban area (city)

Images courtesy of USGS/NASA Landsat 8